


Name: _____

Identify the MAJOR KEY that has the given A4 or d5.



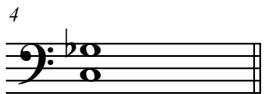
_____ Major.



_____ Major.



_____ Major.




_____ Major.



_____ Major.



_____ Major.



_____ Major.



_____ Major.



_____ Major.



_____ Major.